

The Franck–Hertz Experiment

I think it is safe to say that no one understands quantum mechanics. Do not keep saying to yourself, if you can possibly avoid it, “But how can it be like that?” because you will go “down the drain” into a blind alley from which nobody has yet escaped. Nobody knows how it can be like that.

Richard Feynman

1 Introduction

The discreteness of atomic energy levels was first shown directly in the Franck–Hertz experiment [McGervey, 1983, or almost any modern physics textbook]. The experiment works by colliding electrons with a gas in a tube. While the original experiment used mercury gas, the version that we will be doing uses neon gas instead.

In this experiment electrons are emitted from a cathode and then accelerated through the tube by a potential, U_2 . After being accelerated, the electrons are slowed by a potential drop in the opposite direction, U_3 . Then the electrons are collected at a far end of the tube and the current is measured. In a vacuum tube that contains no gas the current would rise steadily as the accelerating voltage, U_2 , is increased. The presence of the gas changes this behavior because of collisions of the electrons with the gas atoms. At first the current does rise with the potential, but when the electrons get enough energy they inelastically collide with the gas atoms and excite higher energy levels in the gas (see Figure 1). After these collisions the electrons will have lower energy and due to the opposing potential, U_3 they will not make it to the end of the tube. This will cause the current to decrease to a minimum. After this minimum, as the potential increases the current will again increase until the electrons get enough energy to excite the gas twice. This process continues with the electrons repeatedly exciting the gas atoms. The potential difference between the minima (or maxima) is equivalent to the energy of the excited level.

Neon atoms have 10 electrons and a ground state of $1s^22s^22p^6$ (see Figure 2). Due to electron spin-related selection rules, collisions with electrons excite neon atoms from the ground state to the $2p^53p$ and $2p^54p$ states. When falling back toward the ground state by emitting photons the $2p^53s$ state is also allowed. Recall that you can calculate the wavelength of the photons emitted from $E = \frac{hc}{\lambda}$.

2 Procedure

Read through the directions below and set up the circuit as shown in figure 3, but do not turn any of the power supplies on to begin with. The Franck–Hertz tube is rather fragile and can be broken by applying incorrect voltages. Have your instructor check your circuit before any power supplies are switched on. Then work through the directions below again, setting the voltages as suggested, etc.

1. First hook a power supply up across the cathode (U_H). This power supply is used to heat the cathode so that electrons are easily ejected; an AC or DC power would work here. Assuming

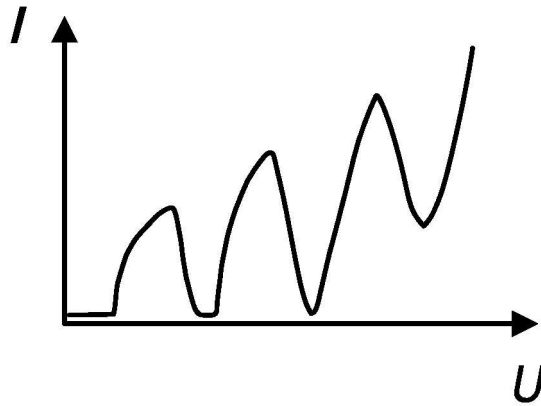


Figure 1: A plot of the current versus potential for a neon tube used for the Franck–Hertz experiment [Leybold Scientific, 2003].

that you are using a DC power supply, set this power supply to 5 V. *Do not put a large voltage across the cathode as it could melt the cathode.*

2. Next, hook a DC power supply from the cathode to the control grid (U_1). This potential difference is used to accelerate the electrons across the tube. It can be raised as high as 5 V, but we will start with this value at 1 V. You can use a DMM to check the voltage across this portion of the circuit when you adjust it, but you should not need to continually monitor this voltage.
3. A high voltage DC power supply will be needed to accelerate the electrons from the control grid to the anode grid (U_2). The voltage from this supply will be varied throughout the lab. Since the voltage readings on the power supply itself are not very precise, you should connect a DMM to measure this potential. To test that your circuit is setup correctly, set this voltage at 70 V. You should be able to see three bands of light between the control and anode grids in the tube, though it is easier to see in the dark. You may want to shade the room lights from the tube or turn off the lights momentarily. If you do not see any light you may try increasing U_1 1 V and then look for the light again. You can repeat this process up to setting U_1 equal to 5 V. If you still do not see the light ask your instructor for assistance. What color are the bands of light? Once you have seen the light, turn U_2 back down to 0 V.
4. Now connect the last power supply from the anode to the collector plate (U_3). Note that the direction of this potential difference is opposite that of the other potential drops. The reason for this is to minimize the current that arrives at the collector grid. Initially set this potential at 5 V.
5. Now connect the Pasco electrometer to the BNC connector on the circuit. The electrometer will be used to (indirectly) measure the current of electrons that arrive at the collector plate. The Pasco electrometer does not directly measure current, so we will use its voltage measurements (which should be proportional to the current) as a proxy for the current.

The voltage for the Pasco electrometer can be read directly on the analog scale on the electrometer, but we will connect it to a PC in order to get more precise measurements. Start up “Science Workshop” or “Data Studio” on the PC in order to get the readings. Open up the Franck–Hertz setup from the program in order to view the electrometer’s measurements.

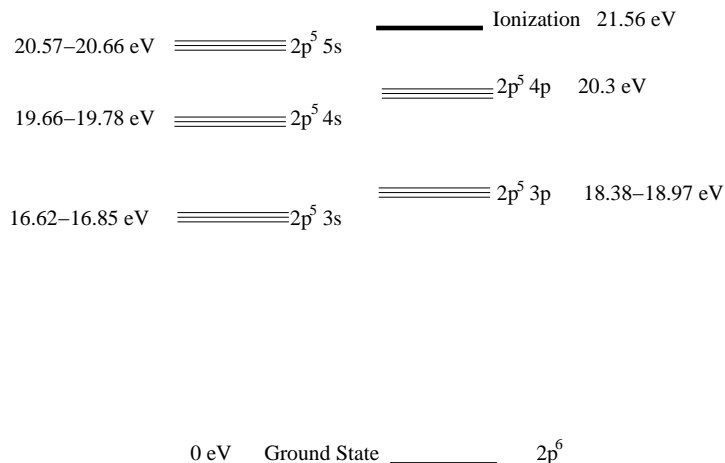


Figure 2: Atomic energy levels for neon [Adapted from *Langley*, 1998].

Note that between *each* electrometer measurement you will have to hit the zero button on the electrometer. Failure to do this will lead to spurious results. After hitting the zero button you should wait at least 5 seconds (and sometimes a minute or more) for the electrometer reading to stabilize.

Also note that the electrometer voltage readings you get will probably be negative. This is OK, though in this case you should consider all references to maxima and minima below to refer to the magnitude of the current.

- Now that the circuit is setup, you should adjust the collector voltage (U_3) in order to get the best possible experimental curve. To do this you will need to roughly find the first minimum in the current (electrometer voltage) versus voltage plot for this tube. To do this start with the anode grid voltage (U_2) at roughly 10 V. Increase the U_2 and take readings of the electrometer voltage versus the anode grid voltage until you have found the minimum electrometer voltage. The minimum should occur before you reach 30 V. Once you have found the minimum, set the anode grid voltage back to that reading. Then vary the collector voltage (U_3) between 0 and 10 V until you minimize the electrometer voltage. Leave the collector voltage (U_3) at this value throughout the rest of the experiment.
- Now you should be ready to take the data for the current versus voltage curve. You should take data for U_2 between 0 and 100 V. Do *not* go any higher than 100 V. While taking the data concentrate your efforts on determining the maxima and the minima in the curve — the regions between the maxima and minima are of less interest. You should be able to find 4 minima under 100 V, though the earlier minima may be easier to determine than the later ones.

3 Data Analysis

- Plot your electrometer voltage versus anode voltage (U_2) data. Find the minima and maxima in U_2 and estimate uncertainties for these values.
- Plot the maxima in U_2 versus the excitation (maxima) number — 1, 2, 3, Find the slope of this line, which should be equal to the excitation energy of neon atoms. Do your results match the expected to within your uncertainties? Which type of excitations dominate in your plots? Is

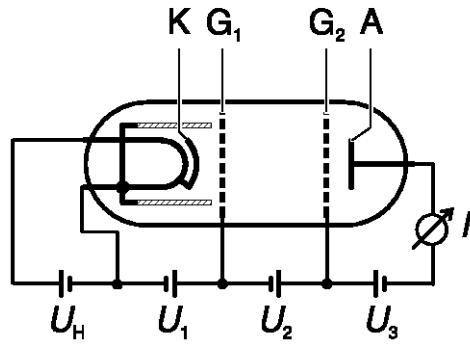


Figure 3: The circuit used to drive a neon tube in this experiment [Leybold Scientific, 2003].

the energy consistent with the color of light that is observed? What color light was observed? What energy level transition would be consistent with the color light that you saw?

3. Repeat the same analysis as above for the minima, including answering the questions. Analysis of which data (maxima or minima) gives better results?

References

Langley, D., *The Franck–Hertz Experiment*, 1998.

Leybold Scientific, *Franck–Hertz Experiment with Neon*, 2003.

McGervey, J. D., *Introduction to Modern Physics*, Academic Press, Inc., San Diego, California, 1983.